



YEAR 5 GEOGRAPHY REVISION

The Test Paper Will Consist of:

Written paper

(1 hour)

This is a test of everything they have learnt in Year 5. Pupils will be asked to reflect on areas suggested in the revision guide and be asked to label, draw or write answers to different types of questions. For example: questions worth one mark might ask pupils to fill in a table; match words or phrases; circle the correct answer; write true or false etc. Longer answers worth two marks will have a number of lines and pupils should try to include 2 pieces of information, make 2 points or show that they have given 2 reasons depending on the question type. Likewise, there will be longer extended questions requiring more to be written (up to a paragraph) carrying 4-8 marks. Spelling and grammar are not assessed.

Pupils should:

- Look carefully at the marks on offer for each question as well as space provided, to guide them in how much to write.

Teachers will:

- remind them of how much time they have used as they progress.

Equipment needed:

Sharp pencils

2 pens if you usually use pen

A ruler

References:

Their exercise books

BBC bitesize website

Geography
Revision List – Year 5

Know the location of:

- Continents and oceans
- The Equator and the Tropics of Cancer and Capricorn
- The main rivers of the world
- General knowledge of Mountain Ranges around the World
- General knowledge of countries around the world

Rivers

- Know the different features of rivers we have studied
- Erosion, deposition, transportation and load
- Meanders
- Waterfalls

Mapwork Skills

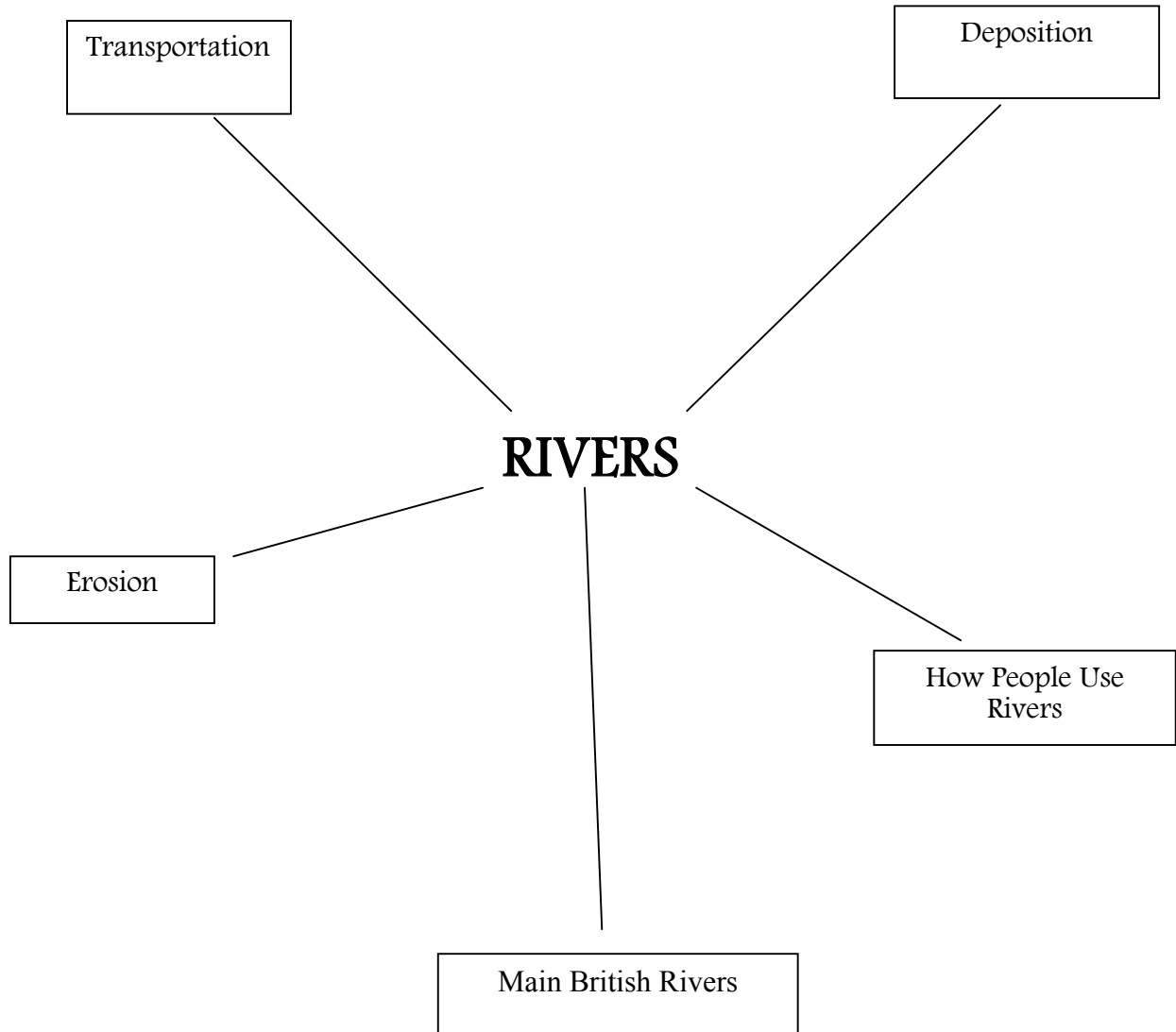
- 4-fig Grid References
- Symbols on an OS map
- Knowledge of a key on an OS map
- Compass directions

Rainforests

- Layers of the rainforest and the conditions in each layer
- Problems associated with deforestation
- Types of animals found in each layer

Task G2

Draw a spidergram and complete it with information to do with rivers.



Task G3

Without looking at your book, circle or underline the answer that you think is correct about the journey of a river. Once you have circled your answers, check in your book to see if you are right.

1. A river begins at its :
Head
Mouth
Source

2. The area drained by a river is called the:
Drainage basin
Flood plain
Water shed

3. The process of removing material from the banks is called:
Deposition
Erosion
Undercutting

4. A smaller river that feeds a main river is called a:
Tributary
Confluence
Spring

5. What is a large bend in a river called?
Delta
Meander
Source

On the following sheet of paper, draw a flow diagram of the journey of a river. Use arrows to show what happens at each stage. You could use diagrams too.

THE JOURNEY OF A RIVER

Maps

You need to know how to:

- Recognize Ordnance Survey symbols on maps:
- Label a map with oceans and continents.

Task G4

Using an Ordnance Survey map to check that you know the correct symbols, draw them below. You can either use maps in your book or look on the Internet for the symbols. A useful website is: magazine.ordnancesurvey.co.uk/.

Use an Ordnance Survey map and draw the symbols for the following features:

Marsh _____

—

Loch _____

Lake _____

Bridge _____

Aqueduct _____

Ford _____

Motorway _____

Church _____

Main Road _____

Task G5

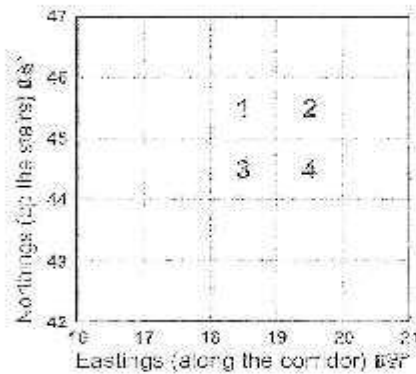
To help you practise grid references, look at the details below and then put your own numbers or shapes in different squares on the grids. Ask someone to check that you have written the correct grid references below.

Grid references

All numbers going from left to right, are called eastings (this is because they are heading eastward), and similarly, all the numbers going from bottom to top are called northings (again because they are heading in a northward direction). You give the eastings first and the northings second.

4-figure map references

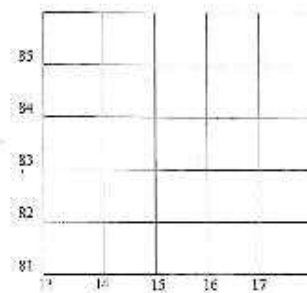
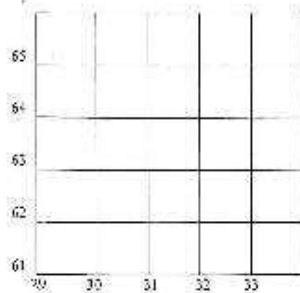
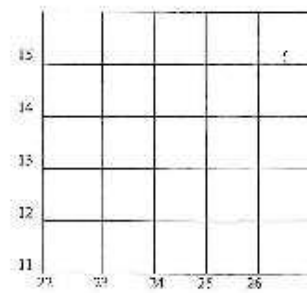
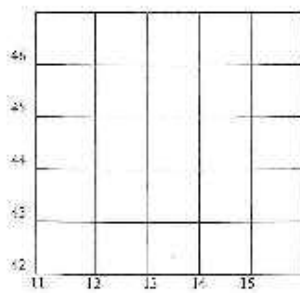
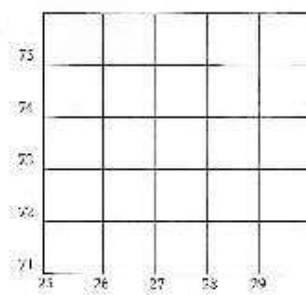
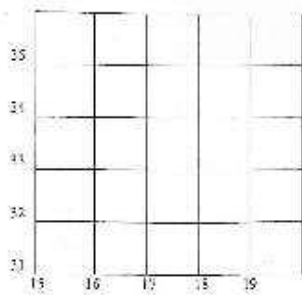
For example, the number 2 in the diagram below is 19 across and 45 up and therefore the 4-figure grid reference is 1945.



The numbered references are:

1 = 18 45 2 = 19 45

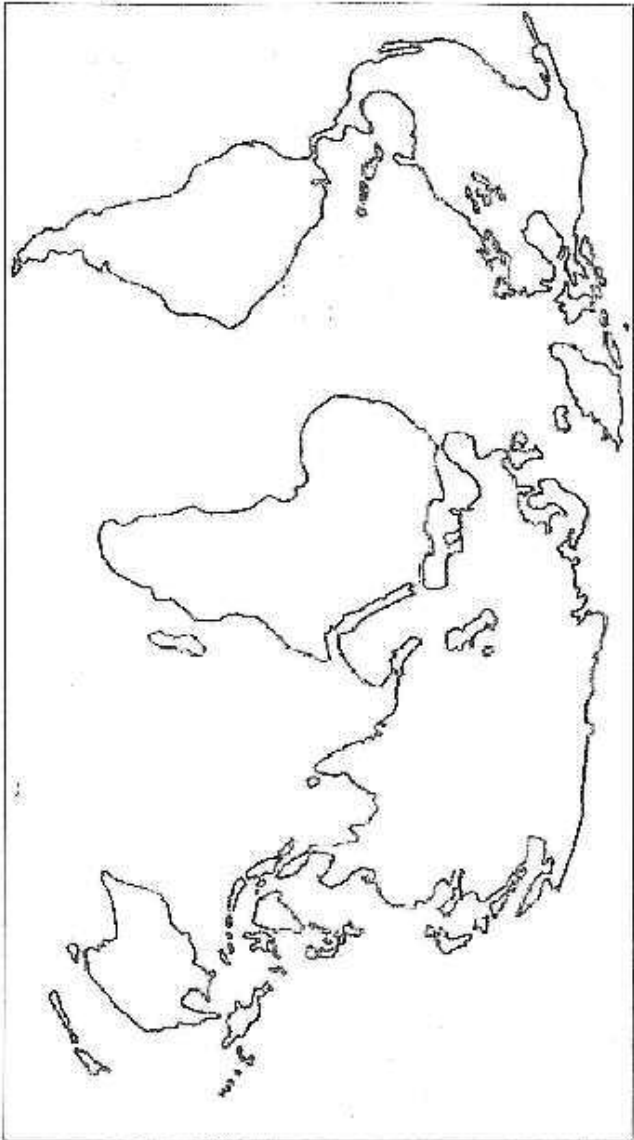
3 = 18 44 4 = 19 44



Task G6
 To help you become familiar with maps, go to the Ordnance Survey web pages:
<http://mapzone.ordnancesurvey.co.uk/mapzone/games.html> &
<http://www.ordnancesurvey.co.uk/oswebsite/education/pdf/mapreadingmadeeasy2.pdf>.

Task 67
Look at your book to find out what the names of the oceans and continents are and then without looking, label the map in pencil. Check back in your book to see if you are correct.

World Map




The Rainforest

You need to know about:

- the location of rainforests
- about the climate, vegetation, health and native people.
- Climate in Manaus, Brazil
- Names of layers in a rainforest.

Task 69

This is a picture of a rainforest in Brazil. There are plans to chop down a large section of the trees. First, list some reasons below, of why people might be in favour of this happening and then write down why they might be against.



In favour

✓

✓

✓

✓

✓

Against

x

x

x

x

x

Task 610

Look at the picture of the layers of a rainforest below and write down as many key words as you can about the different layers and the conditions at each layer.

